

Name _____

Vocabulary Test

A.M.	hour	minute	half hour
quarter hour	analog clock	digital clock	P.M.

Use the words in the word bank. Write the correct word on the line.

1. There are 15 minutes in a _____.
2. A _____ is a clock that uses only numbers to show time.
3. The hours from midnight until noon are labeled _____ and the hours from noon until midnight are labeled _____.
4. An _____ is a clock that has an hour hand and a minute hand.
5. There are 30 minutes in a _____.

Circle the correct answer to each question.

6. The shorter hand on the clock.
 - A. minute
 - B. hour hand
 - C. minute hand
7. This amount of time is sometimes called quarter past or quarter til.
 - F. hour
 - G. half hour
 - H. quarter hour
8. The longer hand on the clock.
 - A. hour
 - B. hour hand
 - C. minute hand

Name _____

Chapter Test, Form 2A

What time did each activity take place? Circle the answer.



We went fishing.

A. 6:10 A.M.

B. 6:10 P.M.

C. 2:30 A.M.

D. 2:30 P.M.

F. 9:30 A.M.

G. 9:30 P.M.

H. 6:45 A.M.

I. 6:45 A.M.



We went to the beach.

A. 9:00 A.M.

B. 9:00 P.M.

C. 12:45 A.M.


D. 12:45 P.M.

F. 4:30 A.M.

G. 4:30 P.M.

H. 6:25 A.M.

I. 6:25 P.M.

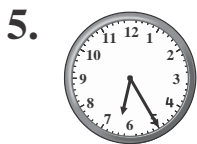


We ate lunch.




We went ice skating.


Read the time. Then write the time.



____ : ____



____ : ____















____ : ____




Chapter Test, Form 2A *(continued)*

Read the time. Then draw the minute hand to show the time.

8.			9.			10.		
11.			12.			13.		

What time is shown on each clock? Circle the answer.



- A. quarter past 3
- B. quarter til 3
- C. quarter til 4
- D. quarter past 4



- F. half past 6
- G. half past 7
- H. quarter til 7
- I. quarter past 6

16. Amber's family went biking at 1:15. They biked for 1 hour. Then they stopped to play at a park for 2 hours. What time did they finish playing?
- A. quarter til 5
 - B. quarter past 5
 - C. quarter past 4
 - D. quarter til 4

17. Carson is at home. He is going swimming at 2:45. He has 4 hours to wait. What time is it now?
- F. quarter til 11
 - G. quarter past 11
 - H. quarter til 12
 - I. quarter past 12

